

Number and Measure  
Level 1  
SECTION A  
(Calculator)

Diagram Booklet

In the boxes below, write your name, centre number and candidate number.

Surname					
Other names					
Centre Number					
Candidate Number					

## INSTRUCTIONS

There may be spare copies of some diagrams in case you need them.

**THIS DIAGRAM BOOKLET *MUST* BE RETURNED  
WITH THE QUESTION PAPER AT THE END OF THE  
EXAMINATION.**

## Contents

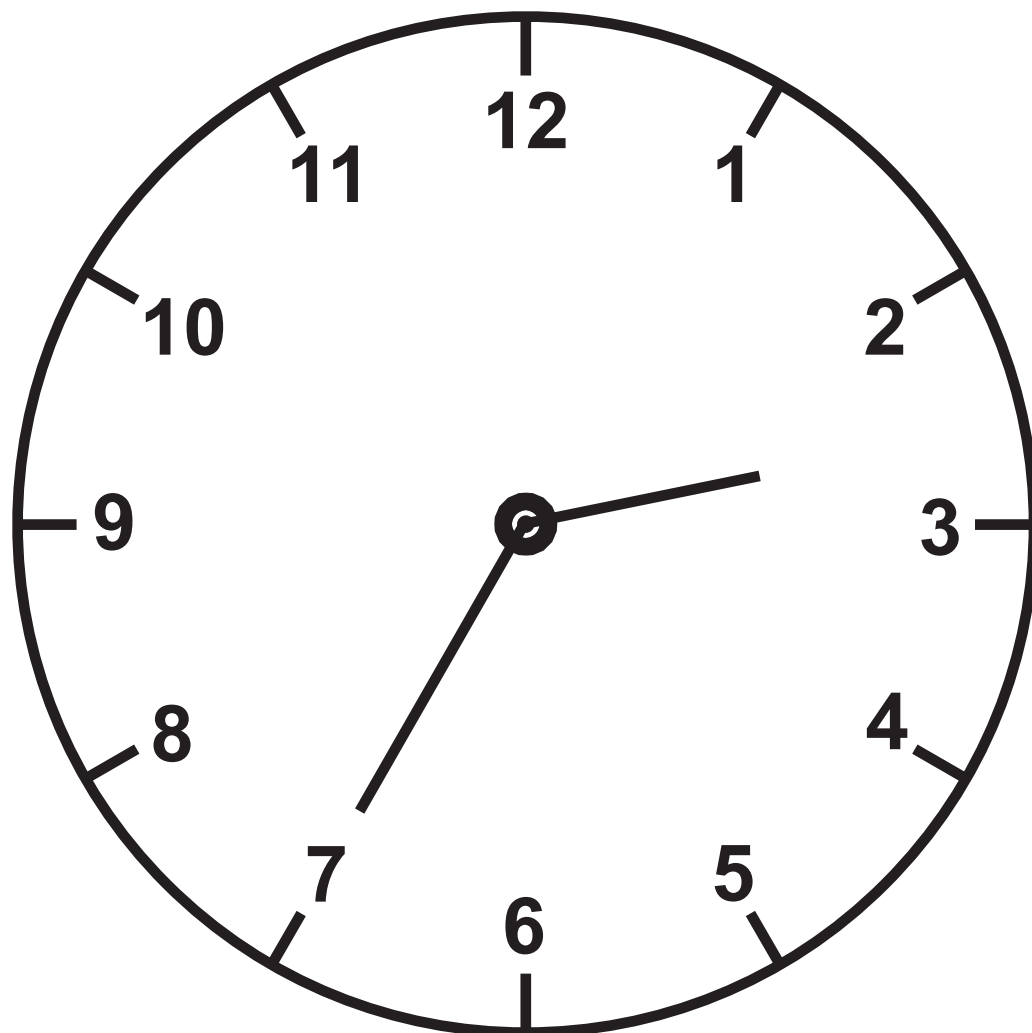
### Page

4	Question 3
5	Question 6
6	Question 7
7	Question 8
8	Question 9(a)
9	Question 9(b)
10	Question 10
11	Question 12
12	Question 13
13	Question 15
14	Question 16

### Spare Copies

15	Question 6
16	Question 9(a)
17	Question 16

Question 3



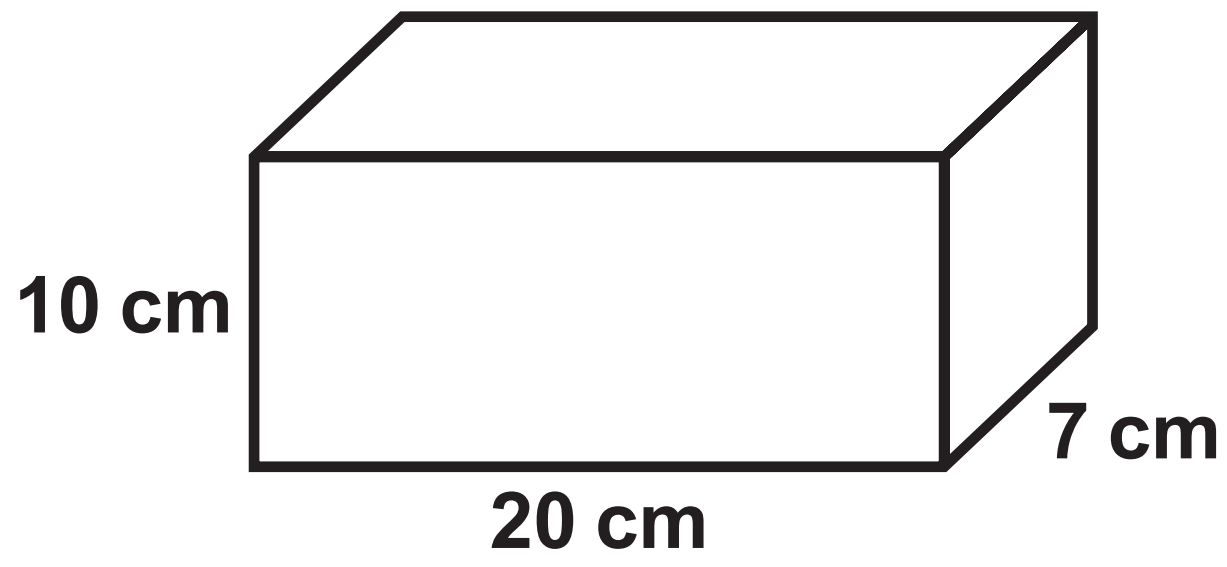
Question 6

May 2021						
Sun	Mon	Tue	Wed	Thu	Fri	Sat
						1
2	3	4	5	6	7	

Question 7

Price list	
sandwich	£2·75
pie	£3·20
packet of crisps	70 pence

Question 8

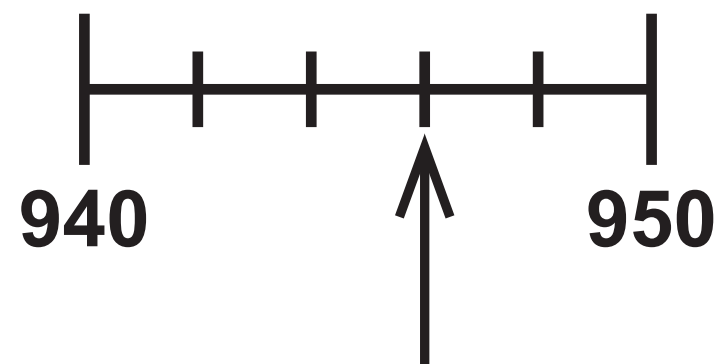


Question 9(a)

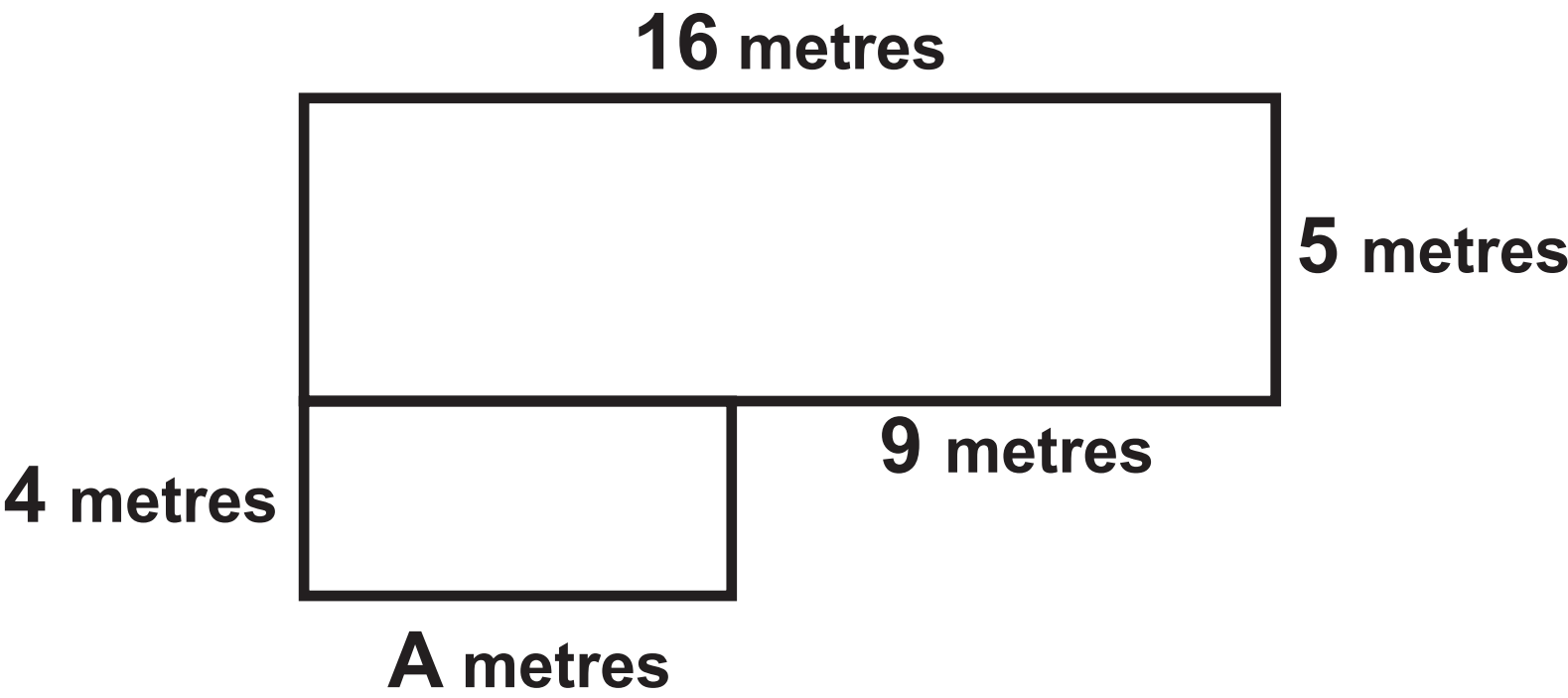




Question 9(b)



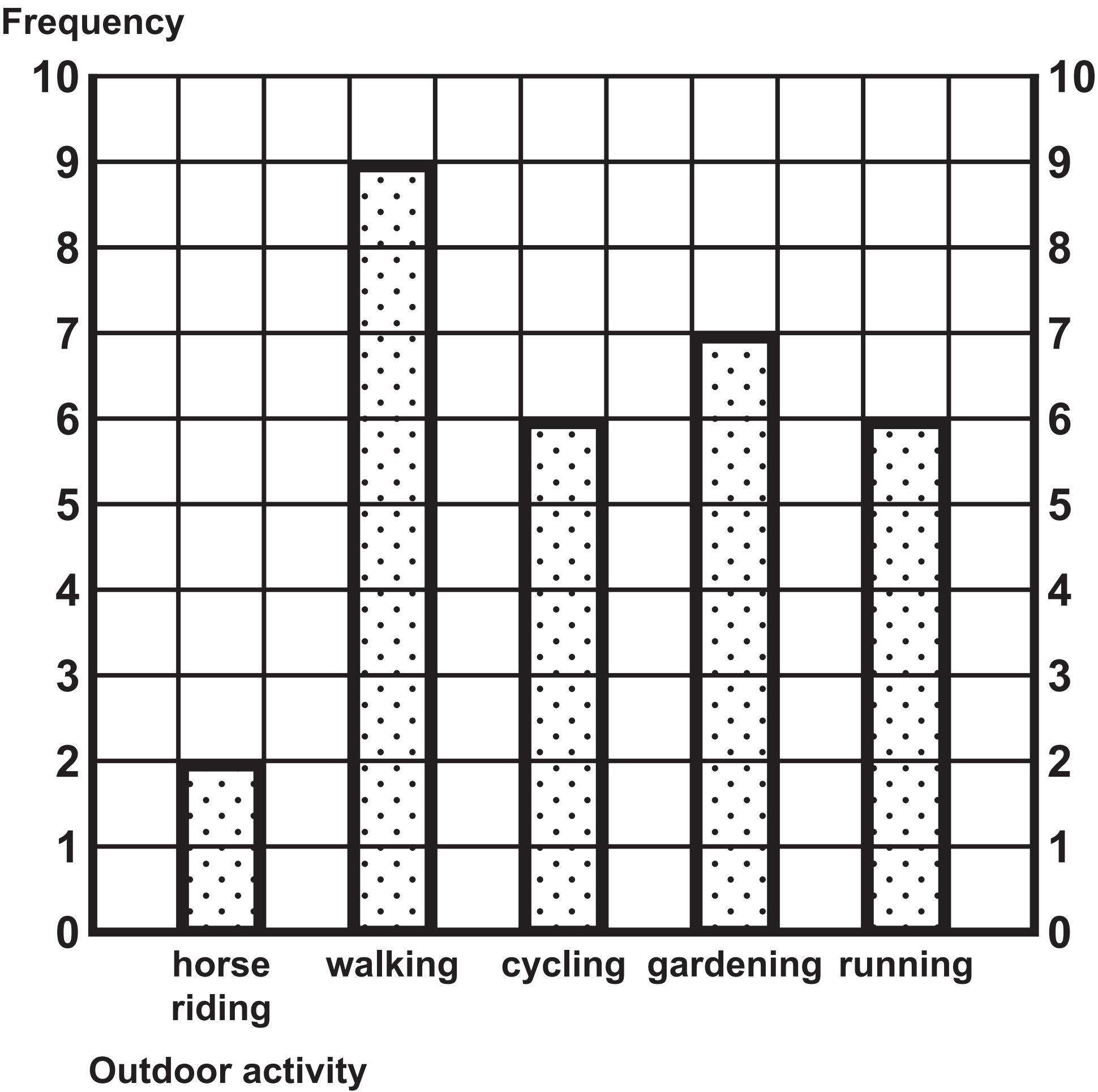
Question 10



Question 12

Swindon to Highworth					
Swindon	06 55	08 31	08 57	09 09	09 24
Lower Stratton	07 12	08 48	09 12	09 24	09 38
South Marston	07 21	08 57	09 21	09 33	09 46
Highworth	07 27	09 03	09 27	09 39	09 51

Question 13



Question 15

Pounds (£)	Dollars (\$)
1	1·15
2	2·30
5	5·75
10	11·50
50	57·50

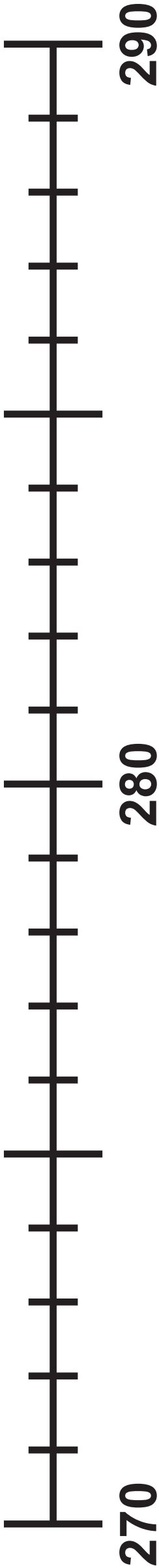
Question 16

Electricity bill	April 2022
Reading 24th April	9503 units
Reading 25th January	8647 units
Number of units used	_____ units
Cost per unit of electricity:	£0·17
Quarterly charge:	£16·70 for this period

Question 6

May 2021						
Sun	Mon	Tue	Wed	Thu	Fri	Sat
						1
2	3	4	5	6	7	

Question 9(a)





Question 16

Electricity bill	April 2022
Reading 24th April	9503 units
Reading 25th January	8647 units
Number of units used	_____ units
Cost per unit of electricity:	£0·17
Quarterly charge:	£16·70 for this period